

UNIT - 4

COUNTING IN TENS




Q1- Counting and fill in the boxes.



a)   + 



$$\boxed{} + \boxed{} = \boxed{}$$





Tens ones



b)   + 

$$\boxed{} + \boxed{} = \boxed{}$$

Tens ones

c)    + 


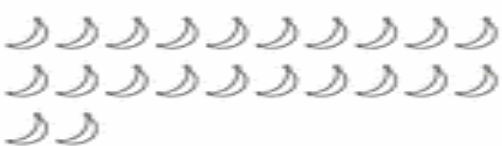





 

$$\boxed{} + \boxed{} = \boxed{} .$$




Q2- Fill in the blanks.

1. 10, 20, _____ 40, _____ 60, 70 _____ 90, 100
2. 30, _____ 50, _____ 80, _____
3. 100, _____, 80, _____ 40 _____ 20 _____
4. 149, _____ 151, _____ 153 _____ 156 _____
5. 207, 208, 209 _____
6. 200, 210, _____ 270 _____ 300
7. 178, 177, 176 _____

Q3. Count and fill in the boxes.(one has been done for you)

	
<u> 2 </u> tens + <u> 4 </u> ones = <u> 24 </u>	
 <p>_____ tens + _____ ones = _____</p>	 <p>_____ tens + _____ ones = _____</p>
 <p>_____ tens + _____ ones = _____</p>	 <p>_____ tens + _____ ones = _____</p>
 <p>_____ tens + _____ ones = _____</p>	 <p>_____ tens + _____ ones = _____</p>

Q4- Study the figures and answer the questions that follow



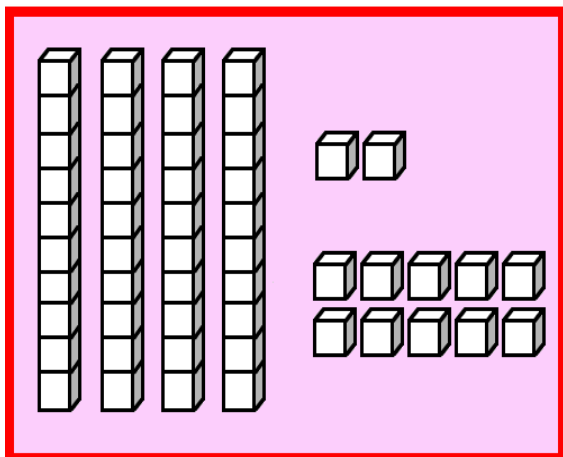
1. How many packets of pencils are there ? _____
2. How many pencils are there in the each packet? _____
3. How many pencils are out of the packet? _____
4. How many pencils are there in all ? _____
5. How many pencils are there in 3 packets? _____

Q5-Shanti uses 10 flowers to make one garland .

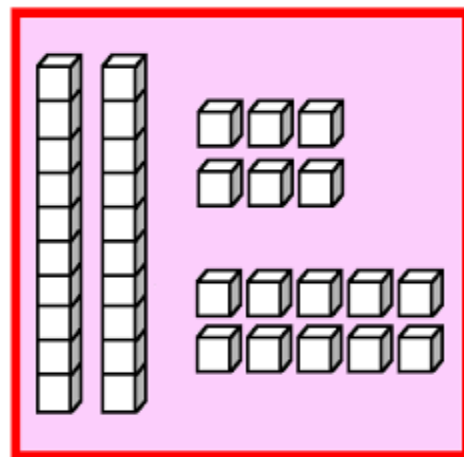


1. How many flowers are there in 4 garlands? _____
2. How many flowers are there in all _____
3. How many garlands are prepared by Shanti ? _____

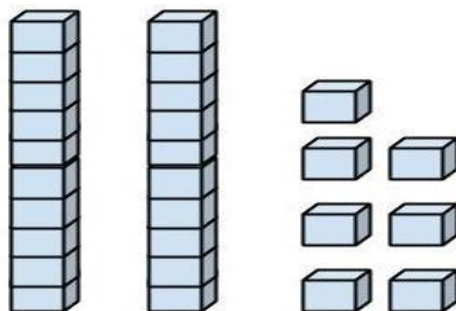
Q6- Count and write the number of boxes.



___ tens and ___ ones



___ tens and ___ ones



___ tens ___ ones

Q7- Write in the long form also the number name .(one has been done for you.)

a. 89- eighty nine $80 + 9$

b. 72 - _____

c. 184 - _____

d. 88- _____

e . 92- _____

f. 65- _____

g. 163- _____

h. 245- _____

Q8- Write the table from 8, 9, 10 , 11, and 12

Q9- Add.

60	45	67	89	55	45
+ 23	+ 40	+ 34	+ 56	+ 12	+ 40
_____	_____	_____	_____	_____	_____